

## Numeracy

In P1, we always start our number lessons with some counting songs. Here is a fun song we use regularly in class:

### 1. Number Song in French (1-10)

<https://www.youtube.com/watch?v=lsc3qLMaCu8>


\*Continue practising other songs suggested in previous documents.

## Maths: Money

- I can apply addition and subtractions skills to pay the exact value for items

### 2. Change from 5p and 10p

- Ben buys a sling shot costing **4p** with a **5p** coin. What is his change?



It might help to lay out the question in a similar way to this picture on your whiteboards.





If needed, please use 1p coins or counters to support, e.g:





- Ask your child to set out five 1p coins on top of the 5p coin (for 5p)
  - Ask your child to move 4 coins (buying a sling shot costing 4p) away into another group
  - Ask your child, "how much is left?"
- Jane buys a dice costing **3p** with a **5p** coin. What is her change?
  - Nick buys a pen costing **1p** with a **5p** coin. What is his change?
  - Ravi buys a ball costing **2p** with a **5p** coin. What is his change?
  - Lucy buys a doll costing **9p** with a **10p** coin. What is her change?
  - Jemma buys a puppet costing **7p** with a **10p** coin. What is her change?





## Challenge: Money Higher Order Thinking (HOTS) Task cards





Please feel free to change/adapt the coins as appropriate...







<p>Which coin is worth more? 1.</p>  <p>How do you know?</p>	<p>Which coin is worth more? 2.</p>  <p>How do you know?</p>
<p>Which coin is worth more? 3.</p>  <p>How do you know?</p>	<p>Which coin is worth more? 4.</p>  <p>How do you know?</p>

1  Copper coins are worth less than silver coins.	2  Coins with gold on them are worth more than silver coins.
3  Both coins are worth pounds and 2 is more than 1.	4  Both coins are worth pence and 50 is higher than 5.

<p>Which group of coins is worth 9. more?</p>  <p>How do you know?</p>	<p>Which group of coins is worth 10. more?</p>  <p>How do you know?</p>
<p>Which group of coins is worth 11. more?</p>  <p>How do you know?</p>	<p>Which group of coins is worth 12. more?</p>  <p>How do you know?</p>

9  Two 50p coins make £1 plus 20p makes £1.20 which is more than £1.10	10  20p and 10p is more than 25p
11  I know that the £2 coin is worth more than a £1 coin and any other given coin.	12  I counted 20, 40, 60 which is more than 50.

<p>Make 20 pence using 17. 3 coins.</p> 	<p>Make 10 pence using 18. 2 coins.</p> 
<p>Make 50 pence using 19. 5 coins.</p> 	<p>Make £1 using 20. 6 coins.</p> 

17  18 	19  or  20  or 
---	---