




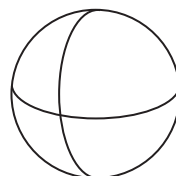
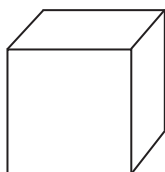
Name: _____

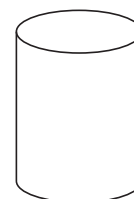
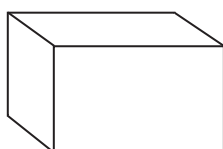
Date: _____

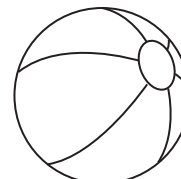
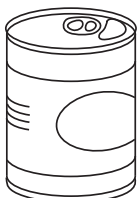
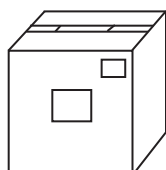
Identify 2-D and 3-D Shapes

Using the word bank, write the name of each shape below.









Word Bank

circle
cone
cylinder

cube
rectangle
rectangular prism

sphere
square
triangle